


Barn Owl Maths


How many owls?




There are 3 nestboxes on the farm, each has 2 adults inside.
The adults have babies.



Box one has
2 adults and 3 owlets.



Box two has
2 adults and 2 owlets.



Box three has
2 adults and 4 owlets.

How many adult owls are there on the farm?

How many baby owlets are there on the farm?

How many owls in total live on the farm?